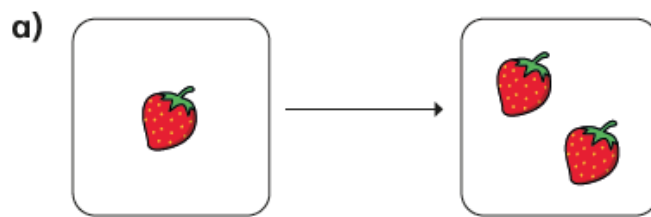


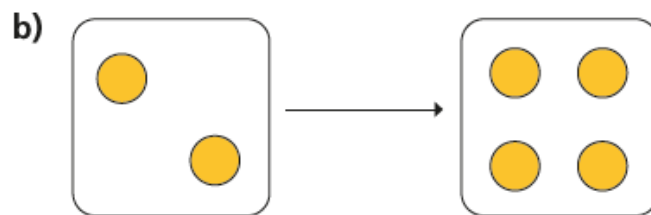
## Make doubles

1 Complete the sentences.

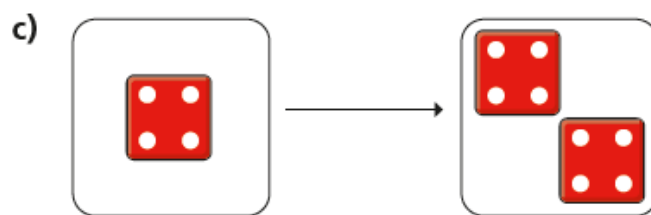
Use the pictures to help you.



Double 1 is



Double 2 is



Double  is

d)

Double  is

2 Match the doubles to the additions.

Double 3	$6 + 6$
Double 6	$7 + 7$
Double 10	$3 + 3$
Double 7	$10 + 10$

3 Fill in the gaps.

- a) Double 15 is
- b) Double 11 is



c) Double 12 is

d) Double 20 is

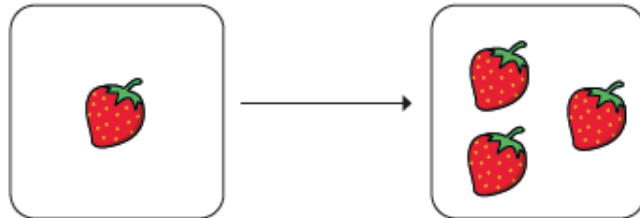
e) Double  is 8

f) Double  is 16

4



I have doubled the number of strawberries.



Do you agree with Mo? \_\_\_\_\_

Talk about it with a partner.

Complete the table by doubling each number.

1	
2	
3	
4	
5	
6	
7	
8	
9	
10	

What patterns do you notice?